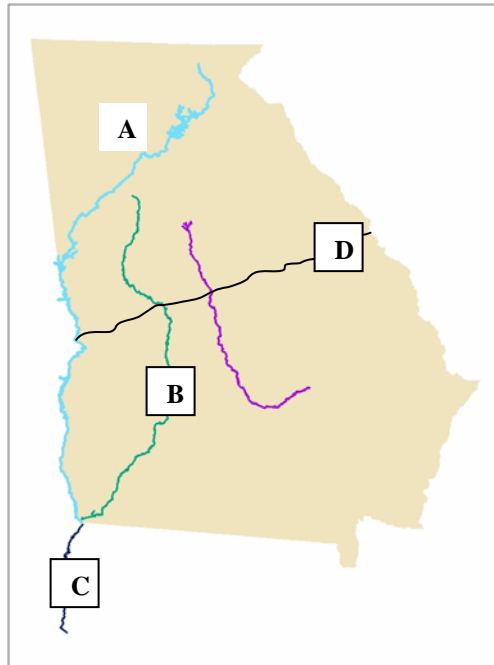


## Flint River Gallery

Dive in to complete the scavenger hunt by looking at the Georgia map and following the path through the Flint RiverQuarium.



1. What 3 rivers make up the ACF basin?  
 (A) \_\_\_\_\_ (B) \_\_\_\_\_  
 (C) \_\_\_\_\_
  
2. Some underground water comes from \_\_\_\_\_.
3. What is represented by (D) ? (This information is not given here.)  
 \_\_\_\_\_
4. What lake is formed where rivers (A) and (B) meet?  
 \_\_\_\_\_


Draw the lake on the map in its correct location.


5. Where the river meets the ocean you will find \_\_\_\_\_ marshes.

6. Blackwater swamps \_\_\_\_\_ water passing through them.



7. Find the organisms that live in each habitat and list them by filling in the blanks. Complete all additional information.

<p><b>Blue Hole Spring</b></p>	<p>spotted _____</p>
<p><b>Whitewater Shoals</b></p> 	<p>Blacktail _____ Describe the water at a shoal.</p> <p>_____</p> <p>_____</p> <p>_____</p>
<p><b>Flint River</b></p>	<p>Begins at the _____</p> <p>_____</p> <p>And ends in _____</p> <p>_____</p> <p>What are two kinds of turtles that live in the Flint or Chattahoochee?</p> <p>_____</p> <p>_____</p>
<p><b>Tidal Marsh</b> (part of the Apalachicola Bay)</p>	<p>What is the most important function of a tidal marsh? _____</p>
<p><b>Bogs</b> (part of the river system)</p>	<p>Name 2 differences between a "true" toad and a "true" frog?</p> <p>_____</p> <p>_____</p> <p>_____</p> <p>(Look carefully. This information is Not given.)</p>

<p><b>Gulf of Mexico</b> Where the river meets the ocean is an</p> <hr/> 	<p>List at least 3 animals you may find here.</p> <p>1. _____</p> <p>2. _____</p> <p>3. _____</p>
--	---

### Discovery Slough

8. What are the 3 stages in a young fish's life?

---

---

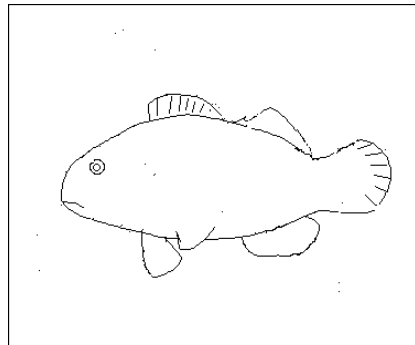
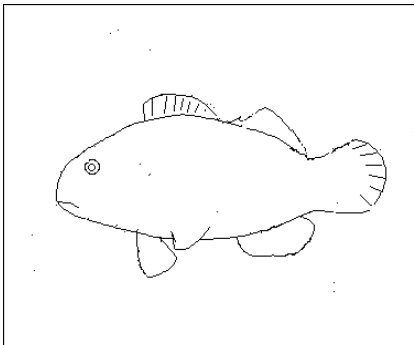
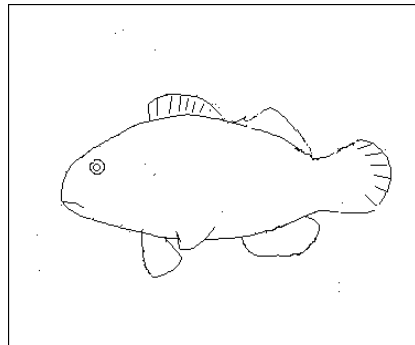
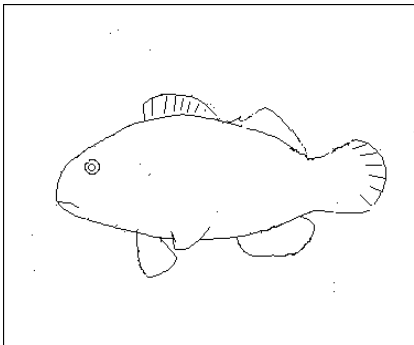
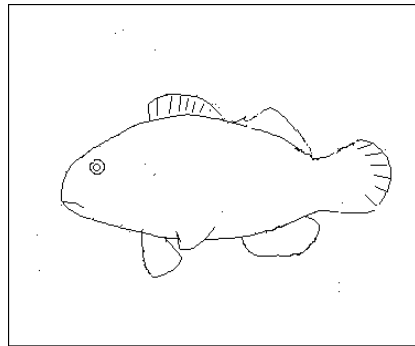
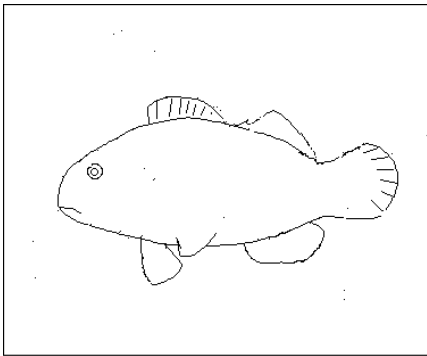
---

## Clown Fish

9. Observe the clown fish in the Discovery Slough hatchery tanks. Do you see any differences in these fish?

Illustrate the differences and similarities by completing the drawings below for as many fish as you can find.

Note: There can be 6 different species of clown fish in our facility at one time.



## Blue Hole

<p><b>10.</b> You can now see all 24 feet of the blue hole.</p>	<p>Fill in the blanks below</p> <p>_____ head catfish</p> <p>_____ bass</p> <p>Gulf sturgeon and striped bass no longer swim up the river to spawn. Why not?</p> <p>_____</p> <p>(Hint: obstruction)</p>
---	--

## World of Water



What is the average rainfall in the following places?

Location  
2003

Average rainfall in January of

- 11. Albany, GA \_\_\_\_\_
- 12. Tropical rainforests in South America \_\_\_\_\_
- 13. Central Madagascar \_\_\_\_\_
- 14. Coastal Madagascar \_\_\_\_\_
- 15. Southern Australia \_\_\_\_\_



16. What is the average % of freshwater in the world? \_\_\_\_\_

17. What are the 4 processes that occur in the water cycle?

\_\_\_\_\_

\_\_\_\_\_

\_\_\_\_\_

\_\_\_\_\_

### Florida Keys Reefs

18. Name at least one fish found in the Florida Keys?

\_\_\_\_\_



Danube River

19. What fish is found in this river? \_\_\_\_\_

20. What type of food do we get from this fish?  
\_\_\_\_\_

21. What is a current problem with this fish?  
\_\_\_\_\_

Colorado River

22. List a species of animal you can find here and one fact about it. \_\_\_\_\_

\_\_\_\_\_ (fact) \_\_\_\_\_  
\_\_\_\_\_



Ganges River

23. Begins at the \_\_\_\_\_ Glacier.

24. What animal hops and spends most of its life out of water?  
\_\_\_\_\_

25. What order of vertebrates does this species fall under? (hint: amphibian, bird, reptile, fish or mammal)  
\_\_\_\_\_

Amazon River

26. This is the largest river in the world. Draw and label a picture of a piranha on the back of this page. What is distinctive about this fish?  
\_\_\_\_\_  
\_\_\_\_\_  
\_\_\_\_\_

27. How does human impact on the Amazon River affect the human population all around the world?  
\_\_\_\_\_  
\_\_\_\_\_  
\_\_\_\_\_  
\_\_\_\_\_



**Spring Run/Cypress Creek**

28. What is the most abundant reptile found in the Florida Everglades?  
\_\_\_\_\_